


Name _____

Nickel Pickles




How much money?



$$5¢ = \boxed{15}¢$$

Count 5, 10, 15



$$5¢ + 5¢ = \boxed{}¢$$

Count _____




$$5¢ + 5¢ = \boxed{}¢$$

Count _____



$$5¢ + 5¢ + 5¢ = \boxed{}¢$$

Count _____



$$5¢ + 5¢ = \boxed{}¢$$

Count _____



$$5¢ + 5¢ + 5¢ = \boxed{}¢$$

Count _____
